

# Unit 5

## Introduction to Integration

- Notes and some practice are included
- Homework will be assigned on a daily basis

Topics Covered:

- ❖ Riemann Sums & Trapezoid Rule
- ❖ Indefinite Integrals (Antiderivatives)
- ❖ Definite Integrals (Fundamental Theorem of Calculus Part 2)
- ❖ Fundamental Theorem of Calculus Part 1

Quiz is \_\_\_\_\_

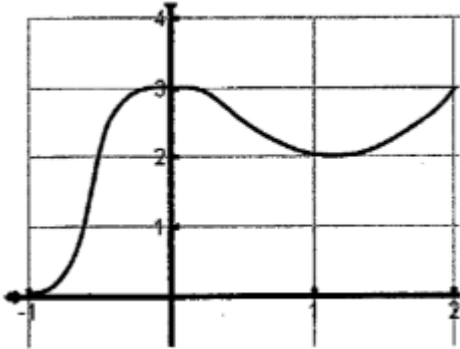
Test is \_\_\_\_\_

Name: \_\_\_\_\_

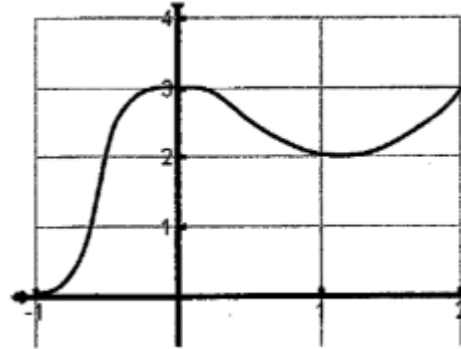
# Riemann Sums Worksheet 1

Given the function estimate the area bounded by the curve and the x-axis using the specified method with 6 subintervals over the interval  $[-1, 2]$ . Draw rectangles and use the graph to estimate y values.

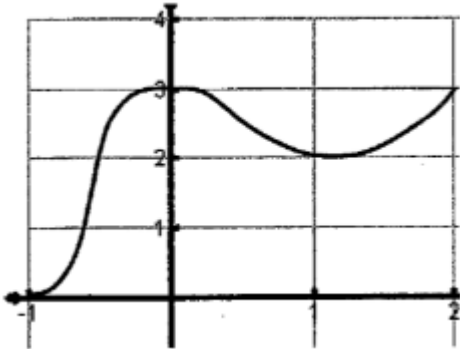
1. Right Riemann Sums



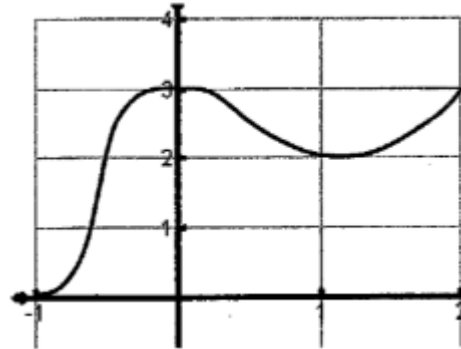
2. Left Riemann Sums



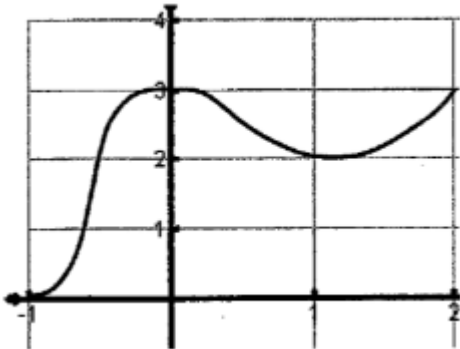
3. Midpoint Method



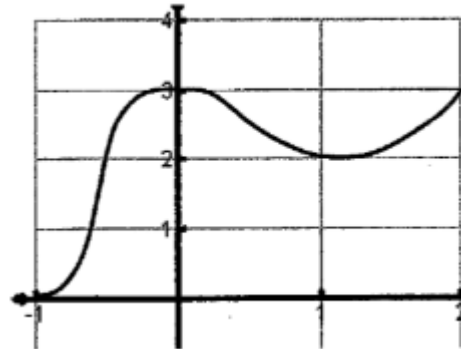
4. Trapezoid Method



5. Inscribed Method



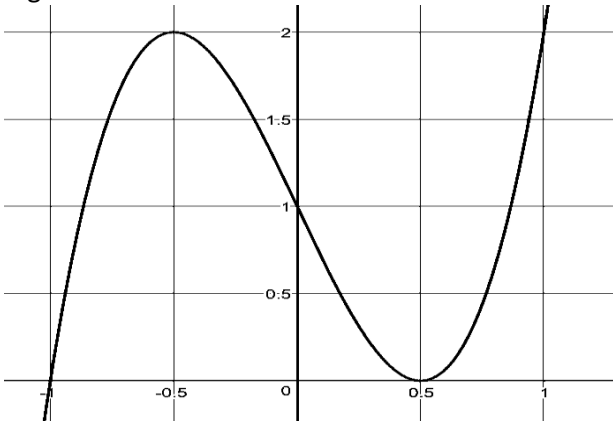
6. Circumscribed Method



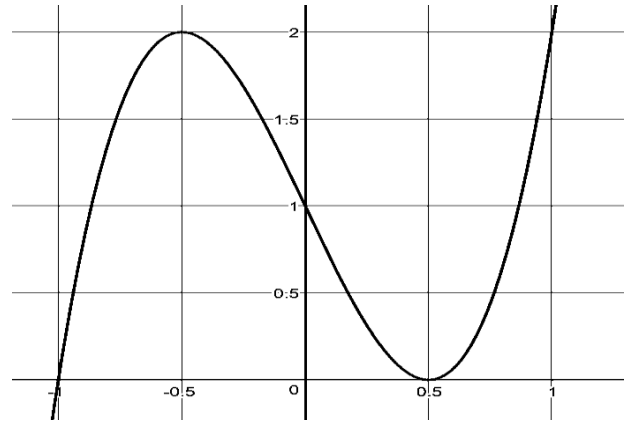
# Riemann Sums Worksheet 2

Given the function estimate the area bounded by the curve and the x-axis using the specified method with 8 subintervals over the interval  $[-1,1]$ . Draw rectangles and use the graph to estimate y values.

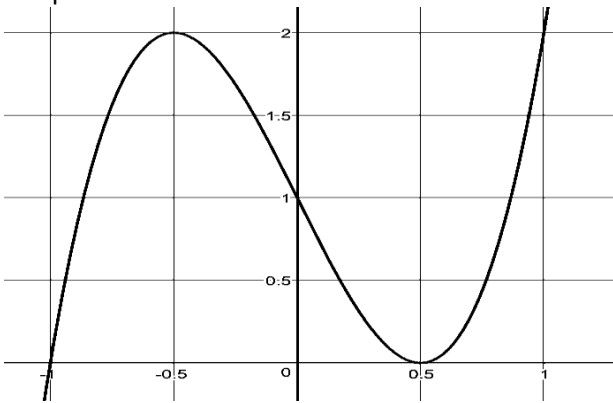
1. Right Riemann Sums



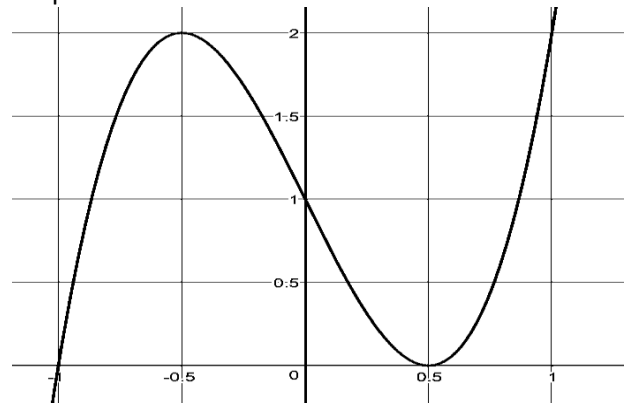
2. Left Riemann Sums



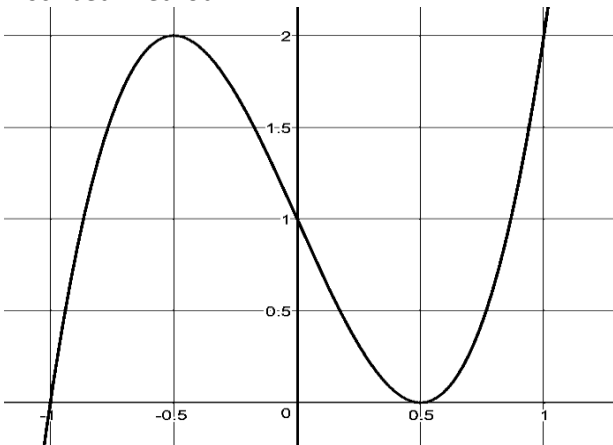
3. Midpoint Method



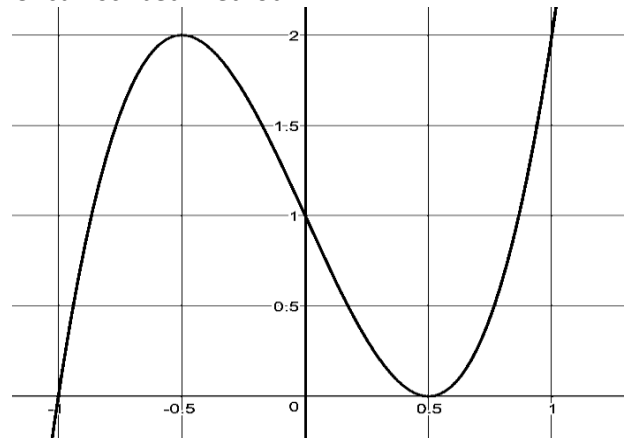
4. Trapezoid Method



5. Inscribed Method



6. Circumscribed Method



# Integration Power Rule

Evaluate each indefinite integral

1. $\int -24x^5 dx$	2. $\int -3 dx$
3. $\int -6x dx$	4. $\int 12x^2 dx$
5. $\int (-24x^5 - 10x) dx$	6. $\int (-9x^2 + 10x) dx$
7. $\int 4x^{-5} dx$	8. $\int -2x^{-3} dx$
9. $\int (-2x^{-3} + 20x^{-5}) dx$	10. $\int (-4x^{-3} - 20x^{-5}) dx$
11. $\int \left(-\frac{4}{x^3} - \frac{8}{x^5}\right) dx$	12. $\int \left(\frac{15}{x^4} + \frac{8}{x^5}\right) dx$

13. $\int -\frac{14x^{\frac{5}{2}}}{2} dx$	14. $\int -\frac{35x^{\frac{2}{5}}}{5} dx$
15. $\int -\frac{5\sqrt[3]{x^2}}{3} dx$	16. $\int -\frac{5\sqrt[4]{x}}{2} dx$
17. $\int \cos x dx$	18. $\int -5 \sin x dx$
19. $\int 3 \cdot \sec^2 x dx$	20. $\int -3 \csc x \cdot \cot x dx$
21. $\int \frac{2}{\sec x} dx$	22. $\int \frac{5}{\csc x} dx$

## Indefinite Integration

	Original Integral	Rewrite	Integrate	Simplify
1.	$\int \frac{1}{x^3} dx$	$\int x^{-3} dx$	$\frac{x^{-2}}{-2} + c$	$-\frac{1}{2x^2} + c$
2.	$\int \sqrt{x} dx$			
3.	$\int \frac{1}{x^2} dx$			
4.	$\int \sqrt[3]{x} dx$			
5.	$\int 2 \sin x dx$			
6.	$\int (x + 2) dx$			
7.	$\int \frac{1}{x\sqrt{x}} dx$			
8.	$\int x(x^2 + 3) dx$			
9.	$\int \frac{1}{2x^3} dx$			
10.	$\int \frac{1}{(2x)^3} dx$			
11.	$\int x^2 \sqrt{x} dx$			
12.	$\int (x + 3)(3x - 2) dx$			
13.	$\int \frac{\sin x}{\cos^2 x} dx$			
14.	$\int \frac{x+1}{\sqrt{x}} dx$			
15.	$\int \frac{x^2+x+1}{\sqrt{x}} dx$			

# The Fundamental Theorem of Calculus: Evaluating Definite Integrals

1. $\int_2^5 (x^3 - \pi x^2) dx$	2. $\int_2^3 2x dx$
3. $\int_1^2 3x^2 dx$	4. $\int_{12}^{20} dx$
5. $\int_1^3 (2x - 3) dx$	6. $\int_0^1 e^{2x} dx$
7. $\int_1^{2.1} \frac{1}{x} dx$	8. $\int_1^{3.5} 2x^{-1} dx$

9. $\int_0^1 \sin \theta \, d\theta$	10. $\int_1^2 \frac{1+y^2}{y} \, dy$
11. $\int_0^2 \left(\frac{x^3}{3} + 2x\right) \, dx$	12. $\int_0^{\frac{\pi}{4}} (\sin t + \cos t) \, dt$
13. $\int_{-3}^{-1} \frac{2}{r^3} \, dr$	14. $\int_0^1 2e^x \, dx$
15. $\int_{-1}^1 2^x \, dx$	16. $\int_1^2 (2x^{-2} - 3) \, dx$
17. $\int_1^3 3\sqrt{x} \, dx$	18. $\int_1^2 (5 - 16x^{-3}) \, dx$



# The Fundamental Theorem of Calculus Part 1

For each problem, find  $F'(x)$ .

1.  $F(x) = \int_{-4}^x (t - 1)dt$

2.  $F(x) = \int_{-3}^x (t^2 + 2t + 3)dt$

3.  $F(x) = \int_{-1}^{x^2} (-2t + 2)dt$

4.  $F(x) = \int_4^{3x} (-t^3 + 11t^2 - 39t + 44)dt$

5.  $F(x) = \int_2^{x^3} \frac{1}{t^3} dt$

6.  $F(x) = \int_x^{x^2} (-2t - 2)dt$

7.  $F(x) = \int_x^{x^2} (t^2 - 8t + 11)dt$

8.  $F(x) = \int_x^{2x} \left(\frac{2}{t}\right) dt$

<p>9. <math>\frac{d}{dx} \int_1^x (t^2 - 1) dt =</math></p>	<p>10. <math>\frac{d}{dx} \int_{-1}^x \sqrt{t^3 + 1} dt =</math></p>
<p>11. <math>\frac{d}{dx} \int_{\pi}^x \frac{1}{1+t^4} dt =</math></p>	<p>12. <math>\frac{d}{dx} \int_x^2 \cos(t^2) dt =</math></p>
<p>13. <math>\frac{d}{dx} \int_3^{x^2} (\sin^4 t) dt =</math></p>	<p>14. <math>\frac{d}{dx} \int_1^{\sqrt{x}} \left( \frac{s^2}{s^2+1} \right) ds =</math></p>
<p>16. <math>\frac{d}{dx} \int_{2x}^{3x} \left( \frac{u-1}{u+1} \right) du =</math></p>	<p>16. <math>\frac{d}{dx} \int_{\tan x}^{x^2} \left( \frac{1}{\sqrt{2+t^2}} \right) dt =</math></p>

# Antiderivative Practice

Find the antiderivative of each.

1.  $\int x^7 dx$

2.  $\int 5x^3 dx$

3.  $\int (-2x^{-3}) dx$

4.  $\int (x^2 - x + 1) dx$

5.  $\int (7x^3 + 2x^2 - 5) dx$

6.  $\int x^{\frac{1}{2}} dx$

7.  $\int x^{\frac{3}{5}} dx$

8.  $\int (x^{-5} + x^{\frac{1}{4}}) dx$

9.  $\int \sec^2 x dx$

10.  $\int \cos x dx$

11.  $\int \sec x \cdot \tan x dx$

12.  $\int \csc^2 x dx$

13.  $\int \sin x dx$

14.  $\int \csc x \cdot \cot x dx$

# The Fundamental Theorem of Calculus Practice

For each of the following problems, find the value of the integral.

1.  $\int_{-2}^1 5 \, dx$

2.  $\int_1^4 (3x^2) \, dx$

3.  $\int_{-1}^1 (x^3) \, dx$

4.  $\int_4^9 (5\sqrt{x}) \, dx$

5.  $\int_2^3 \left(\frac{4}{x^3}\right) \, dx$

6.  $\int_1^8 (\sqrt[3]{x^2}) \, dx$

7.  $\int_{-2}^4 \left(\frac{x}{2} + 3\right) \, dx$

8.  $\int_0^{\pi/2} (\sin x) \, dx$

For each of the following problems, find the derivative.

9.  $\int_{-4}^x \left(\frac{5}{t^3}\right) \, dt$

10.  $\int_1^{x^2} (t^3 - 4t^2 + 3) \, dt$

11.  $\int_{-\frac{\pi}{4}}^{3x} (-\csc t \cot t) \, dt$

12.  $\int_x^{x^2} (-t - 1) \, dt$

## Meaning of Integration Unit Review

### Section 1: Indefinite Integrals

1.  $\int \sec^2 x dx$

2.  $\int dx$

3.  $\int 4 \sin x dx$

4.  $\int \frac{5}{x^3} dx$

5.  $\int \sqrt[2]{x^5} dx$

6.  $\int \csc x \cot x dx$

7.  $\int \frac{-5}{(2x)^3} dx$

8.  $\int (5x+1)^2 dx$

9.  $\int (x^{-4} + 3x^3) dx$

10.  $\int 3 \sec x \tan x dx$

11.  $\int \left( \frac{1}{\sqrt[3]{x^2}} - \sec^2 x \right) dx$

12.  $\int (\pi e^x + 7 \cos x) dx$

13.  $\int (2x-5)^2 dx$

14.  $\int \csc x \cot x dx$

15.  $\int 3x^{-1} dx$

16.  $\int (3x-4)^2 dx$

17.  $\int e x^{-1} dx$

18.  $\int \frac{dx}{\cos^2 x}$

### Section 2: Definite Integrals – Fundamental Theorem of Calculus

19.  $\int_1^8 \left( x^{-1/3} + \frac{1}{x} \right) dx$

20.  $\int_0^{\pi} (\sin t + 1) dt$

21.  $\frac{d}{dx} \int_2^x \sqrt{1+4t^2} dt$

22.  $\frac{d}{dx} \int_3^{x^2} \frac{1}{\sqrt{2-t^5}} dt$

23.  $\frac{d}{dx} \int_{\tan x}^{x^2} \frac{1}{4-t^3} dt$

24.  $\frac{d}{dx} \int_2^x \sec(t) dt$

25.  $\frac{d}{dx} \int_{-5}^x \sec(t) dt$

26.  $\frac{d}{dx} \int_x^2 \sec(t) dt$

27.  $\frac{d}{dx} \int_2^{2x^5} \sec(t) dt$

$$28. f(x) = \int_{-1}^x \ln(t) dt \quad f'(x) = \quad 29. f(x) = \int_x^{-4} \ln(t) dt \quad f'(x) = \quad 30. f(x) = \int_0^{\sin x} \ln(t) dt \quad f'(x) =$$

$$31. f(x) = \int_{3+x^2}^x \ln(t) dt \quad f'(x) = \quad 32. \frac{d}{dx} \int_{-1}^x t^2 dt \quad 33. \int_{-1}^x t^2 dt$$

$$34. \frac{d}{dx} \int_{x^3}^5 \left( \frac{t^2 - 3}{2t} \right) dt \quad 35. \int_1^{25} x^{1/2} dx \quad 36. \int_0^{3\pi/2} (\sin t + 1) dt$$

$$37. \frac{d}{dx} \int_2^x \sec^3 t dt \quad 38. \frac{d}{dx} \int_{e^x}^{x^3} \frac{1}{1+t^2} dt \quad 39. \frac{d}{dx} \int_3^{x^2} \sqrt{5t - t^2} dt$$

40. If  $\int_2^7 f(x) dx = 8$  and  $\int_2^7 g(x) dx = -3$  and  $\int_5^7 f(x) dx = -1$ , find the following:

a.  $\int_2^7 [3f(x) + 2g(x)] dx$       b.  $\int_7^2 3g(x) dx$

c.  $\int_2^5 f(x) dx$       d.  $\int_3^5 g(x) dx$

### Section 3: Area

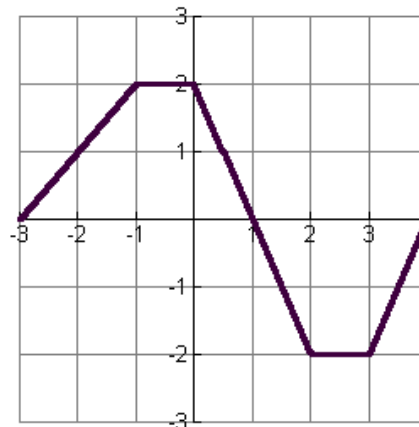
Given the graph below, if  $g(x) = \int_{-2}^x f(t) dt$ , find the following

41.  $g(2)$

42.  $g(0)$

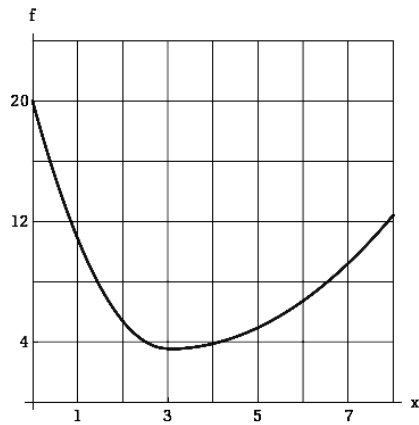
43.  $g(4)$

44.  $g(-3)$

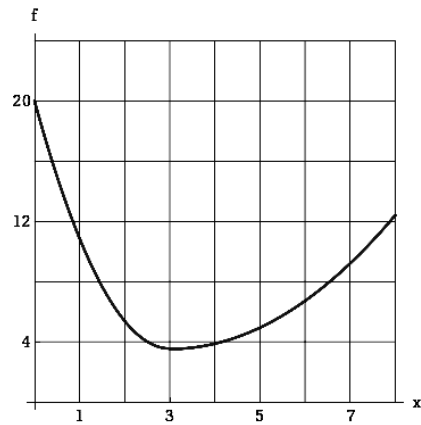


Draw the picture only for #46, 48-50. Draw the picture and find the area for #45 & 47.

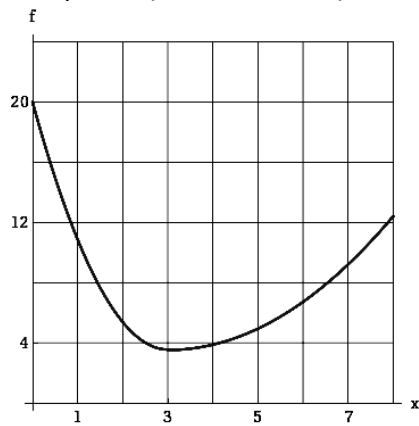
45. Right Riemann Sum (8 subintervals)



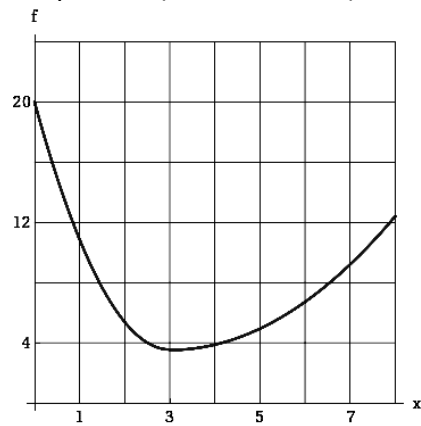
46. Left Riemann Sum (16 subintervals)



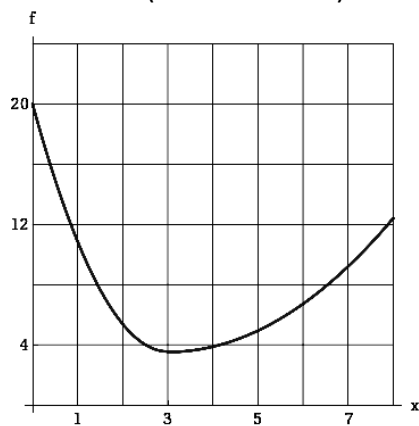
47. Midpoint (4 subintervals)



48. Trapezoid (8 subintervals)



49. Inscribed (8 subintervals)



50. Circumscribed (4 subintervals)

